

music
Made Easy
Webinar
Notes Quiz

1. Identify



1. Flag
2. Stem
3. Head

2. Identify



1. Flag
2. Stem
3. Head

3. Identify



1. Flag
2. Stem
3. Head

4. A Beam is a horizontal line that replaces _____ and joins notes.

1. Flags
2. Bars
3. Stems

5. Identify



1. Half Note
2. Whole Note
3. Quarter Note

6. Identify



1. Half Note
2. Whole Note
3. Quarter Note

7. Identify



1. Half Note
2. Whole Note
3. Quarter note

8. Identify



1. Sixteenth Note
2. Eighth Note

9. Identify



1. 16th Note
2. 8th Note

10. A Dot placed to the right of a note adds _____ to the value of the note.

1. 25%
2. 50%
3. 75%

11. A whole note is equal to _____ half notes.

1. 2
2. 4
3. 8

12. A whole note is equal to _____ quarter notes.

1. 2
2. 4
3. 8

13. A whole note is equal to _____ 8th notes.

1. 2
2. 4
3. 8

14. A whole note is equal to ____ 16th notes.

1. 4
2. 8
3. 16

15. A half note is equal to ____ quarter notes.

1. 2
2. 4
3. 8

16. A half note is equal to ____ 8th notes.

1. 2
2. 4
3. 8

17. A half note is equal to ____ 16th notes.

1. 2
2. 4
3. 8

18. A quarter note is equal to ____ 8th notes.

1. 2
2. 4
3. 8

19. A quarter note is equal to ____ 16th notes.

1. 2
2. 4
3. 8

20. An 8th note is equal to ____ 16th notes.


1. 2
2. 4
3. 8


21. Identify 


1. Half Rest
2. Whole Rest
3. Quarter Rest

22. Identify 

1. Half Rest
2. Whole Rest
3. Quarter Rest

23. Identify 
1. Half Rest
 2. Whole Rest
 3. Quarter Rest

24. Identify 
1. Sixteenth Rest
 2. Eighth Rest

25. Identify 
1. 16th Rest
 2. 8th Rest